

ECE 111 - Homework #9

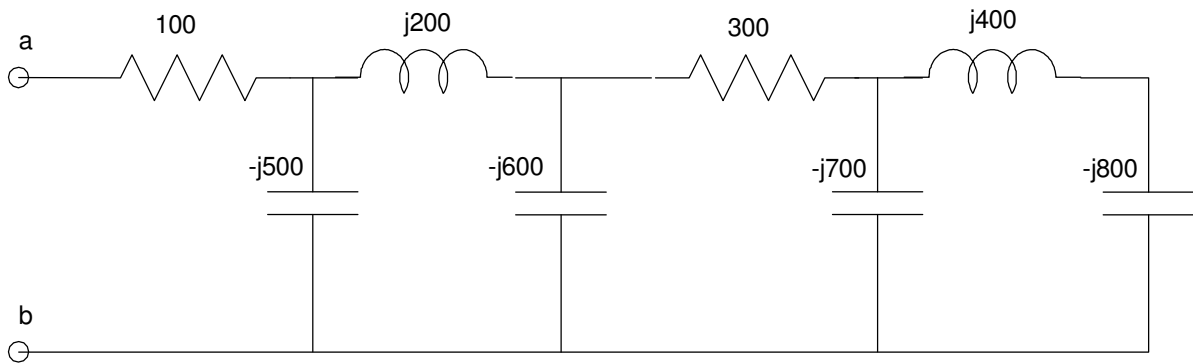
Week #9: ECE 311 Circuits II - Due Tuesday, March 21st

Please email to jacob.glower@ndsu.edu, or submit as a hard copy, or submit on BlackBoard

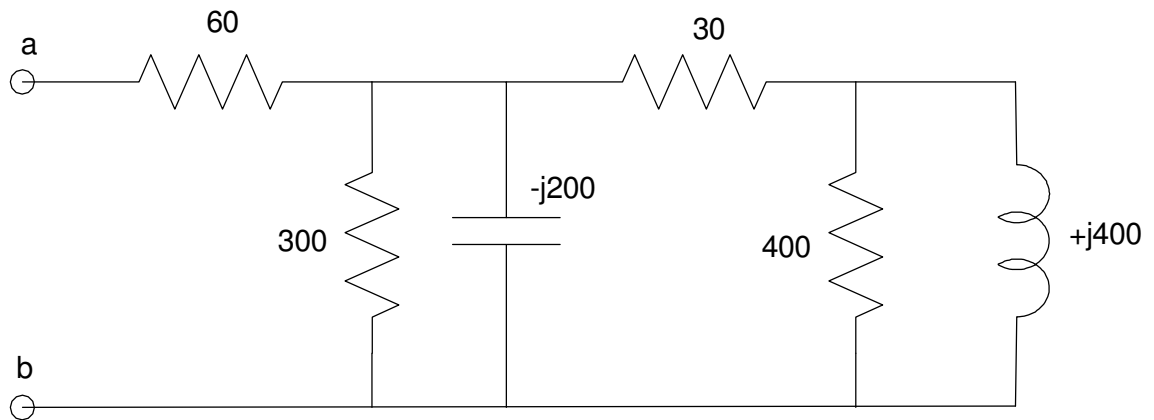
1) Solve for Y

- $Y = \left(\frac{(4+j12)(2-j13)}{(2-j)} \right)$
- $Y = \left(\left(\frac{4+j12}{2-j} \right) + \left(\frac{2-j13}{2+j} \right) \right) \left(\frac{3+j8}{9+j7} \right)$

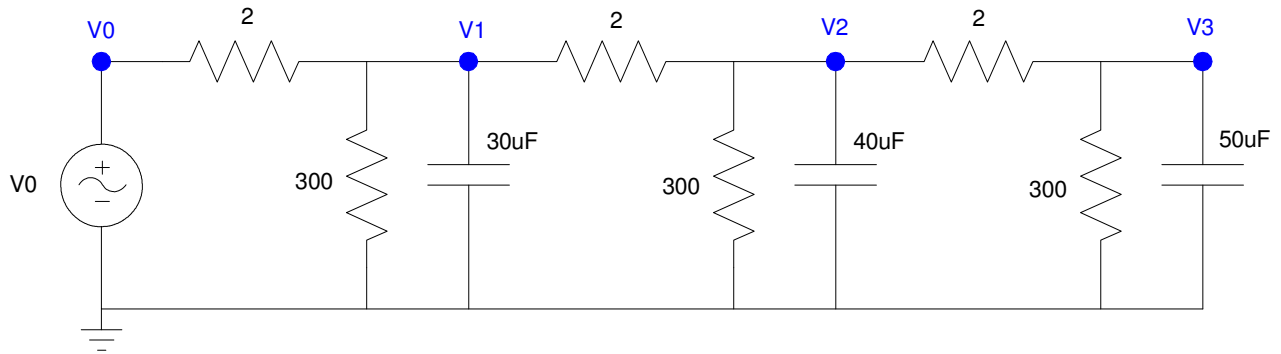
2) Determine the impedance Zab



3) Determine the impedance Zab



4) Assume $V_0 = 10$



- Determine the impedances of each element at 0 rad/sec
- Write the voltage node equations
- Solve for V_1 , V_2 , and V_3 .

5) Check your results in CircuitLab

6) Assume V_0 is a 10V, 2000 rad/sec (318.3Hz)

$$V_0 = 10 \sin(2000t)$$

- Determine the impedances of each element at 2000 rad/sec
- Write the voltage node equations
- Solve for V_1 , V_2 , and V_3 as complex numbers
- Express V_1 , V_2 , and V_3 in terms of sine and cosine function:
 - hint: $V_1 = a + jb$ (phasor representation) means $V_1(t) = a \cos(2000t) - b \sin(2000t)$

7) Check your results in CircuitLab using a transient simulation for 10ms (time step = 10us).