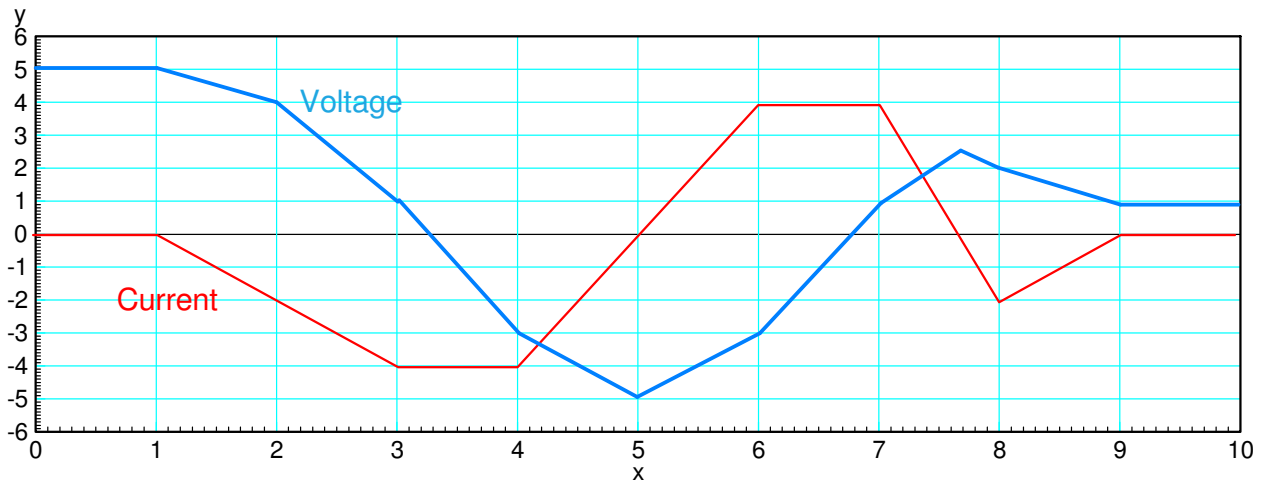
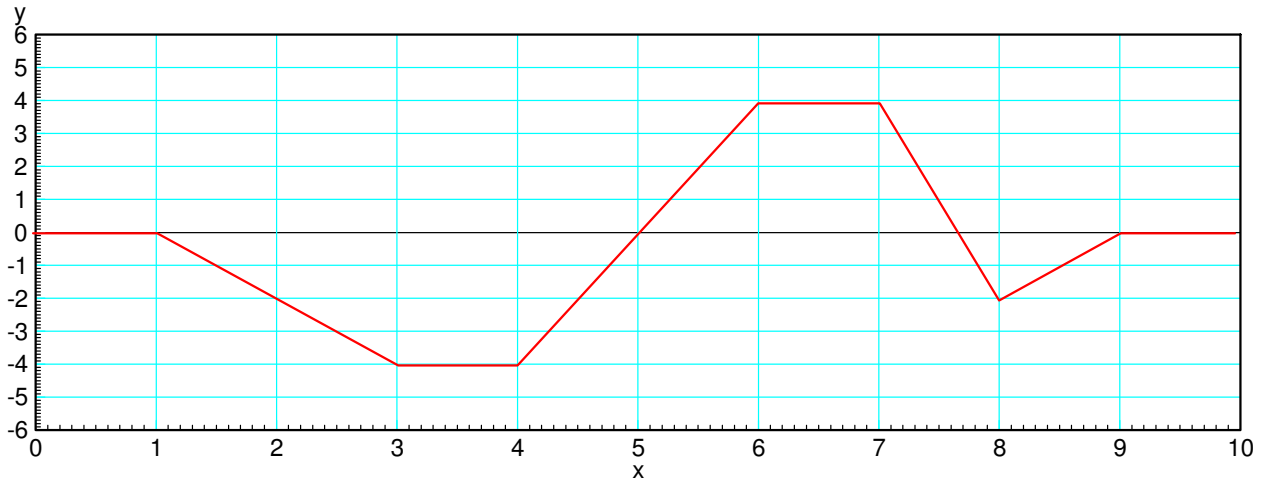


ECE 111 - Homework #10

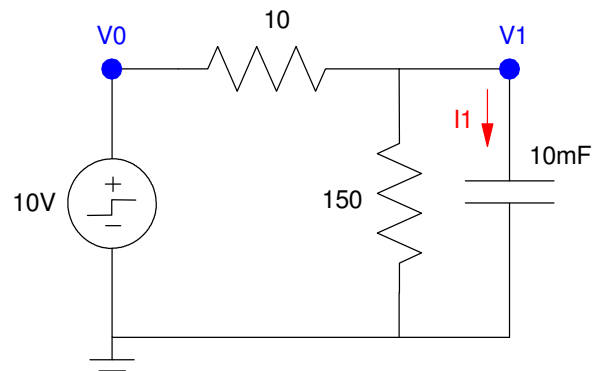
ECE 311 Circuits II - Heat Equation
Due Monday, October 30th

1) Assume the current flowing through a one Farad capacitor is shown below. Sketch the voltage. Assume $V(0) = 5V$. The voltage is the integral of the current (capacitors are integrators)

$$V = \frac{1}{C} \int I \cdot dt$$



1-Stage RC filter:



2) Write the differential equation that describe this circuit. Note:

$$I_1 = C \frac{dV_1}{dt} = \sum(\text{current to node } V_1)$$

$$I_1 = 0.01 \cdot \frac{dV_1}{dt} = \left(\frac{V_0 - V_1}{10} \right) - \left(\frac{V_1}{150} \right)$$

$$\frac{dV_1}{dt} = 10V_0 - 10.667V_1$$

3) Find and plot $V_1(t)$ for five seconds using Matlab.

Solve in Matlab

$$\frac{dV_1}{dt} = 10V_0 - 10.667V_1$$

Matlab Code

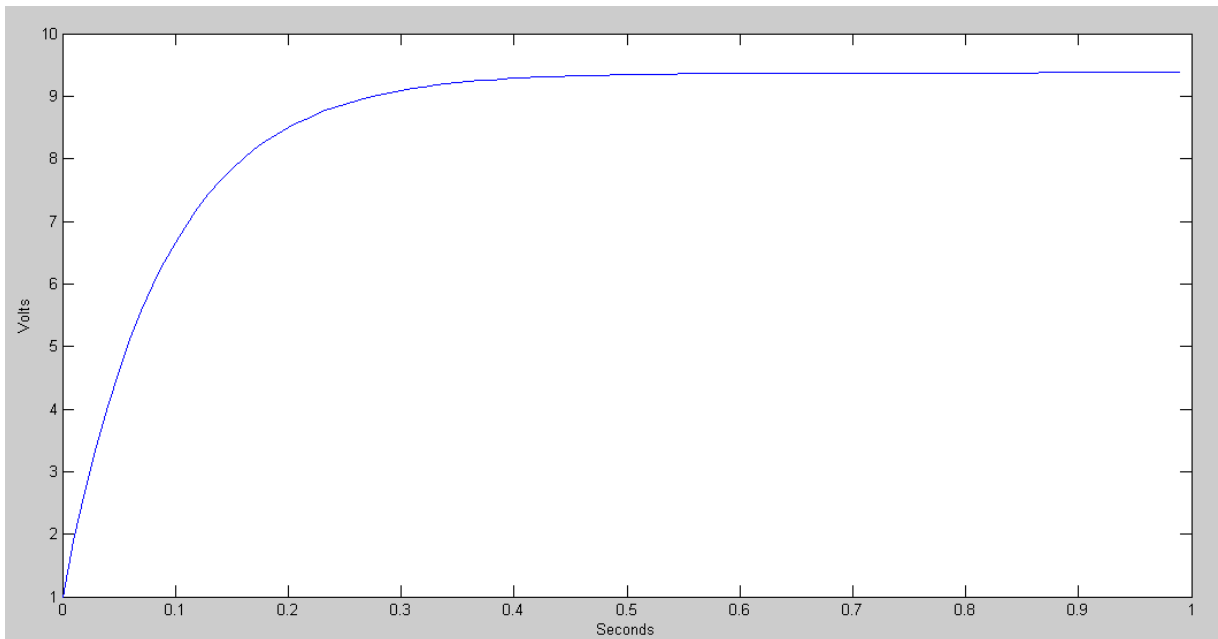
```
V1 = 0;
t = 0;
dt = 0.01;
y = [];
V0 = 10;

while(t < 1)
    dV1 = 10*V0 - 10.667*V1;

    V1 = V1 + dV1*dt;
    t = t + dt;

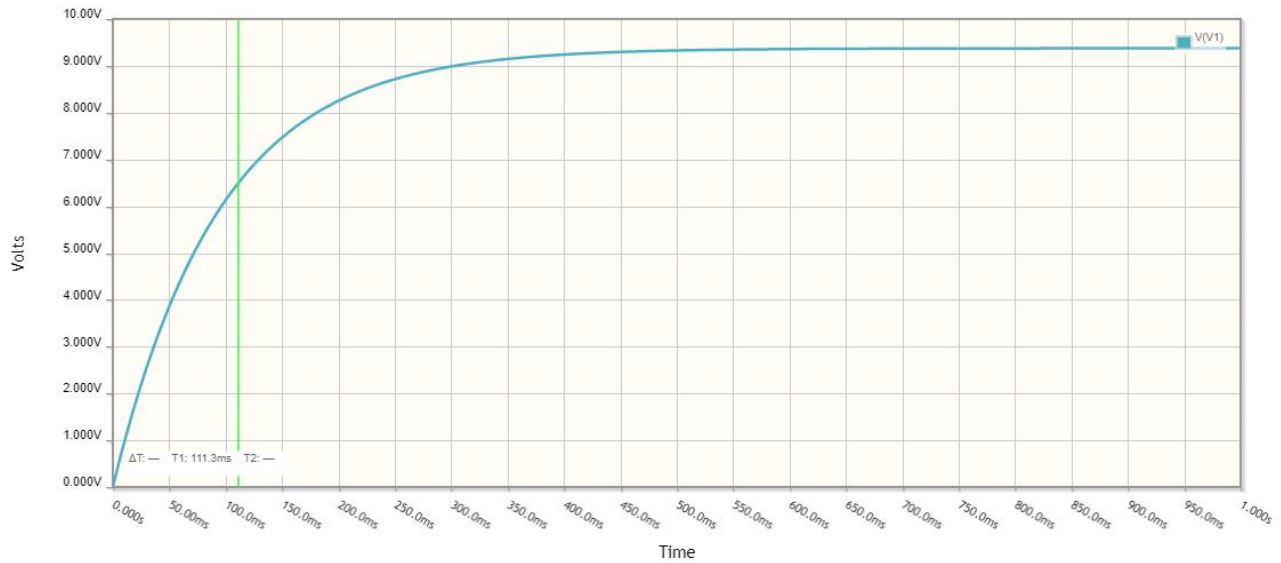
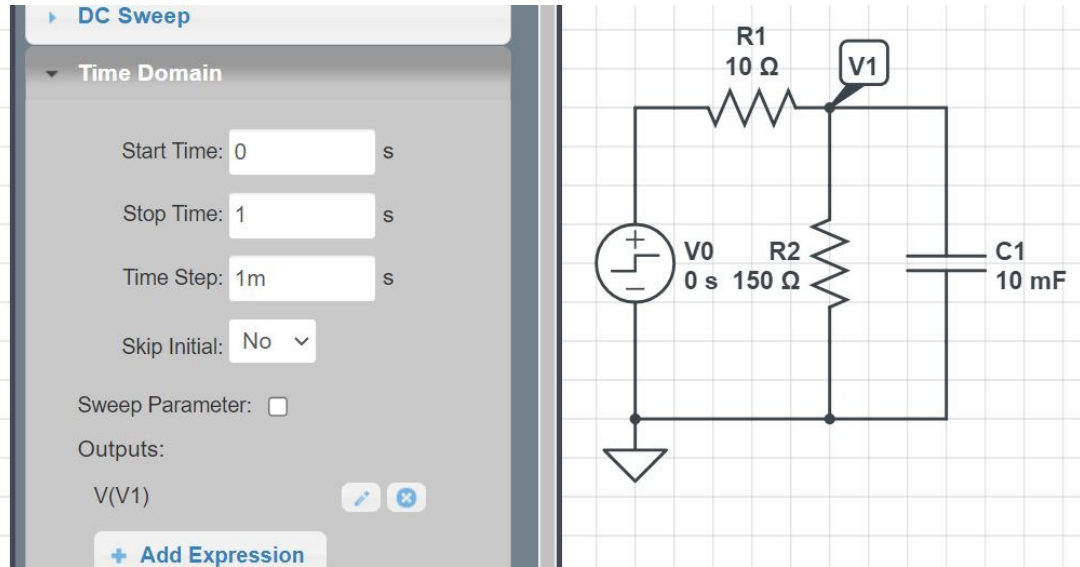
    y = [y ; V1];
end

t = [0:length(y)-1]' * dt;
plot(t,y);
xlabel('Seconds');
ylabel('Volts');
xlim([0,1])
```



4) Find and plot $V_1(t)$ for one second using CircuitLab

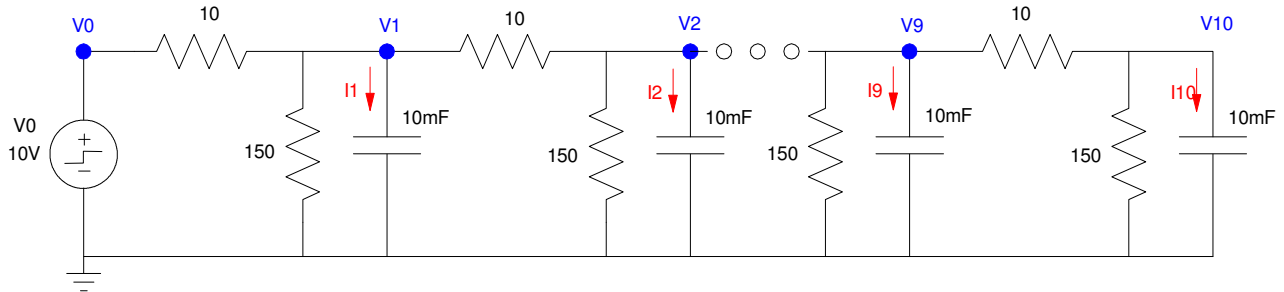
- Same plot we got in Matlab
- CircuitLab is using numerical integration to find the voltlages



10-Stage RC Filter

5) Write the dynamics for this system as a set of ten coupled differential equations:

$$I_1 = C \frac{dV_1}{dt} = \sum(\text{current to node } V_1)$$



Nodes #1 through #9 will all be the same due to symmetry. Writing the node equation at V1:

$$I_1 = 0.01 \cdot \frac{dV_1}{dt} = \left(\frac{V_0 - V_1}{10} \right) - \left(\frac{V_1}{150} \right) + \left(\frac{V_2 - V_1}{10} \right)$$

$$\frac{dV_1}{dt} = 10V_0 - 20.667V_1 + 10V_2$$

$$\frac{dV_2}{dt} = 10V_1 - 20.667V_2 + 10V_3$$

$$\frac{dV_3}{dt} = 10V_2 - 20.667V_3 + 10V_4$$

⋮

$$\frac{dV_9}{dt} = 10V_8 - 20.667V_9 + 10V_{10}$$

Node #10 is the oddball due to only having one 10 Ohm resistor connected to it

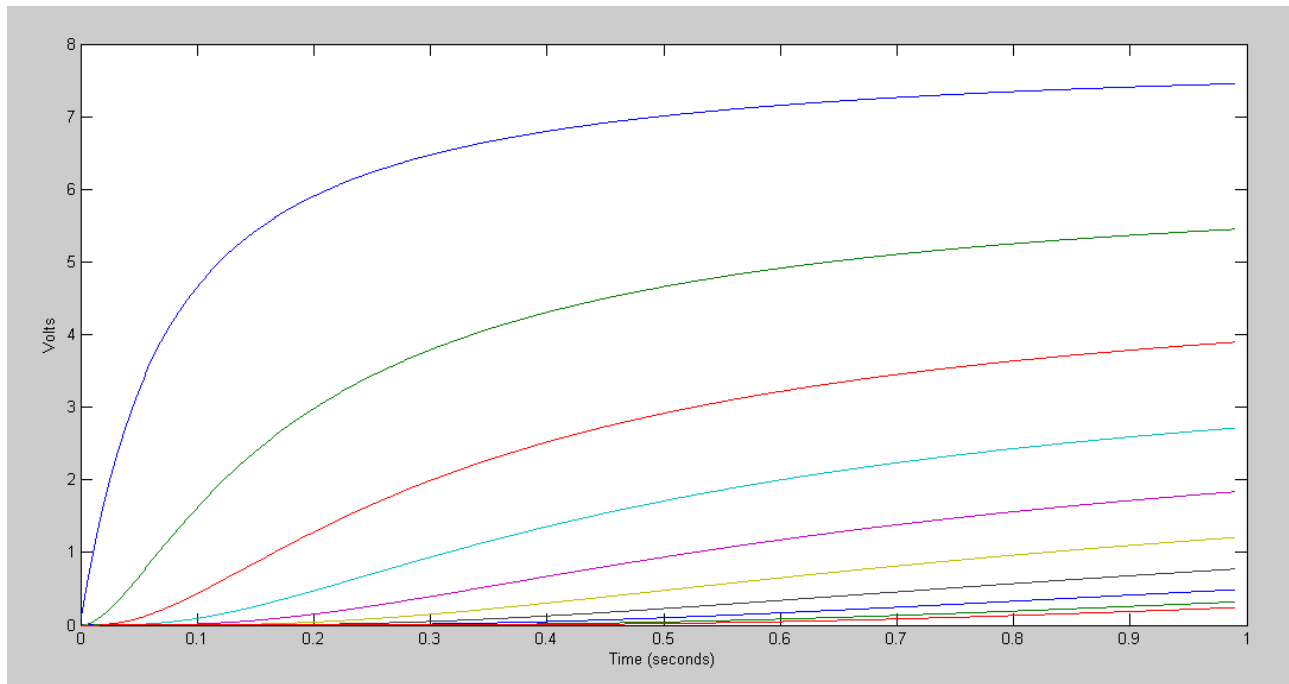
$$I_{10} = 0.01 \cdot \frac{dV_{10}}{dt} = \left(\frac{V_9 - V_{10}}{10} \right) - \left(\frac{V_{10}}{150} \right)$$

$$\frac{dV_{10}}{dt} = 10V_9 - 10.667V_{10}$$

6) Using Matlab, solve these ten differential equations for $0 < t < 1$ s assuming

- The initial voltages are zero, and
- $V_0 = 10V$.

Same result as CircuitLab



Code:

```
% 10-stage RC Filter

V = zeros(10,1);

dV = zeros(10,1);
V0 = 10;
dt = 0.001;
t = 0;
i = 0;

y = [];

while(t < 0.99)

    dV(1) = 10*V0 - 20.667*V(1) + 10*V(2);
    dV(2) = 10*V(1) - 20.667*V(2) + 10*V(3);
    dV(3) = 10*V(2) - 20.667*V(3) + 10*V(4);
    dV(4) = 10*V(3) - 20.667*V(4) + 10*V(5);
    dV(5) = 10*V(4) - 20.667*V(5) + 10*V(6);
    dV(6) = 10*V(5) - 20.667*V(6) + 10*V(7);
    dV(7) = 10*V(6) - 20.667*V(7) + 10*V(8);
    dV(8) = 10*V(7) - 20.667*V(8) + 10*V(9);
    dV(9) = 10*V(8) - 20.667*V(9) + 10*V(10);
    dV(10) = 10*V(9) - 10.667*V(10);

    V = V + dV*dt;
    t = t + dt;

    y = [y ; V'];

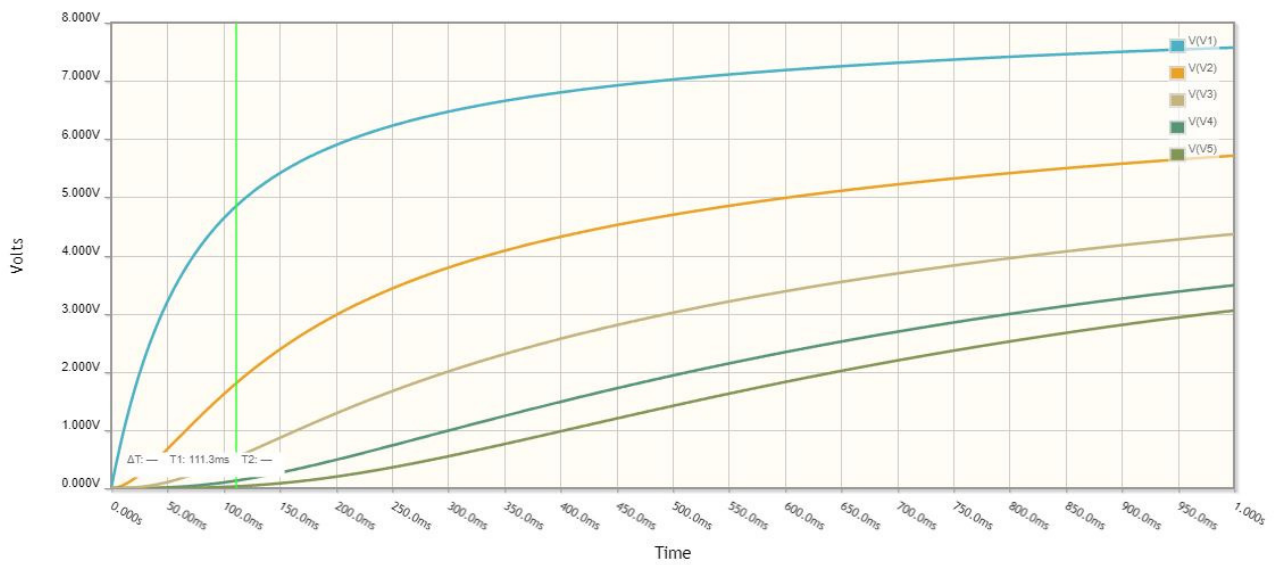
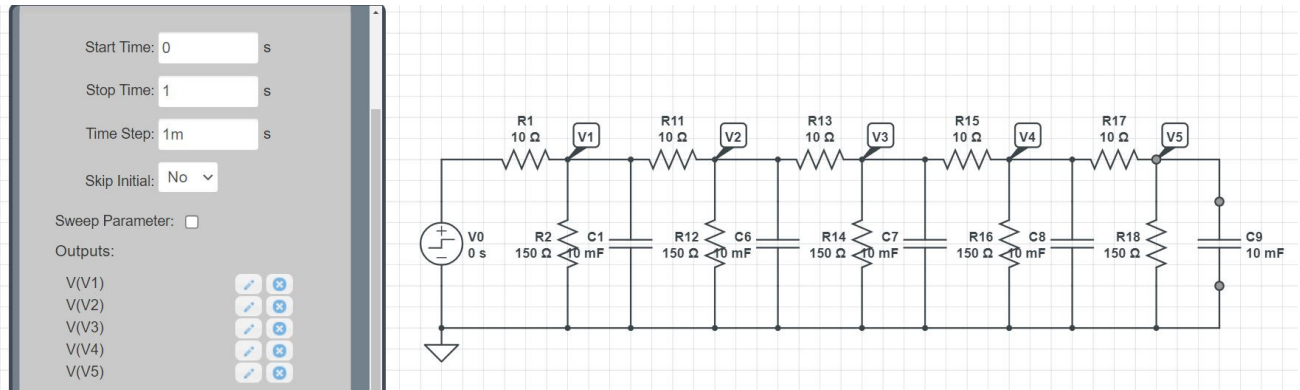
    plot([0:10], [V0;V], '.-', t, 0, 'b+');
    xlim([0,10]);
    ylim([0,10]);
    pause(0.01);

end

pause(10);
hold off

t = [1:length(y)]' * dt;
plot(t,y);
xlabel('Time (seconds)');
ylabel('Volts');
```

7) Using CircuitLab, find the response of this circuit to a 10V step input. *note: It's OK if you only build this circuit to 3 nodes...*



Natural Response: Eigenvectors and Eigenvalues

8) Assume $V_0 = 0V$. Determine the initial conditions of $V_1..V_{10}$ so that

- The maximum voltage is 10V and
- 5a) The voltages go to zero as slow as possible
- 5b) The voltages go to zero as fast as possible.

Simulate the response for these initial conditions in Matlab.

This is an eigenvalue / eigenvector problem. Placing the dynamics in matrix form

$$dV = A \cdot V + B \cdot V_0$$

```
>> A = zeros(10,10);
>> for i=1:9
A(i,i) = -20.667;
A(i,i+1) = 10;
A(i+1,i) = 10;
end
>> A(10,10) = -10.667
```

A =

```
-20.6670    10.0000         0         0         0         0         0         0         0         0
 10.0000   -20.6670    10.0000         0         0         0         0         0         0         0
         0    10.0000   -20.6670    10.0000         0         0         0         0         0         0
         0         0    10.0000   -20.6670    10.0000         0         0         0         0         0
         0         0         0    10.0000   -20.6670    10.0000         0         0         0         0
         0         0         0         0    10.0000   -20.6670    10.0000         0         0         0
         0         0         0         0         0    10.0000   -20.6670    10.0000         0         0
         0         0         0         0         0         0    10.0000   -20.6670    10.0000         0
         0         0         0         0         0         0         0    10.0000   -20.6670    10.0000
         0         0         0         0         0         0         0         0    10.0000  -10.6670
```

```
>> [M,V] = eig(A)
```

M = Eigenvectors

fast										slow
-0.1286	-0.2459	0.3412	0.4063	0.4352	0.4255	0.3780	0.2969	-0.1894		0.0650
0.2459	0.4063	-0.4255	-0.2969	-0.0650	0.1894	0.3780	0.4352	-0.3412		0.1286
-0.3412	-0.4255	0.1894	-0.1894	-0.4255	-0.3412	-0.0000	0.3412	-0.4255		0.1894
0.4063	0.2969	0.1894	0.4352	0.1286	-0.3412	-0.3780	0.0650	-0.4255		0.2459
-0.4352	-0.0650	-0.4255	-0.1286	0.4063	0.1894	-0.3780	-0.2459	-0.3412		0.2969
0.4255	-0.1894	0.3412	-0.3412	-0.1894	0.4255	0.0000	-0.4255	-0.1894		0.3412
-0.3780	0.3780	0.0000	0.3780	-0.3780	-0.0000	0.3780	-0.3780	-0.0000		0.3780
0.2969	-0.4352	-0.3412	0.0650	0.2459	-0.4255	0.3780	-0.1286	0.1894		0.4063
-0.1894	0.3412	0.4255	-0.4255	0.3412	-0.1894	0.0000	0.1894	0.3412		0.4255
0.0650	-0.1286	-0.1894	0.2459	-0.2969	0.3412	-0.3780	0.4063	0.4255		0.4352

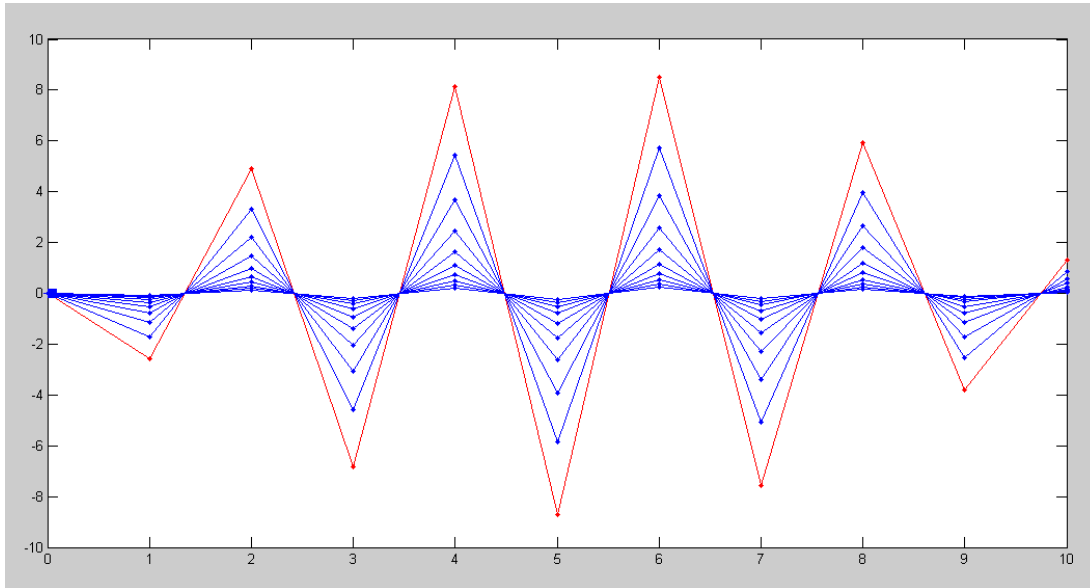
```
>> eig(A)'
```

Eigenvalues

```
-39.7785  -37.1918  -33.1368  -27.9738  -22.1616  -16.2166  -10.6670  -6.0060  -2.6476  -0.8904
```

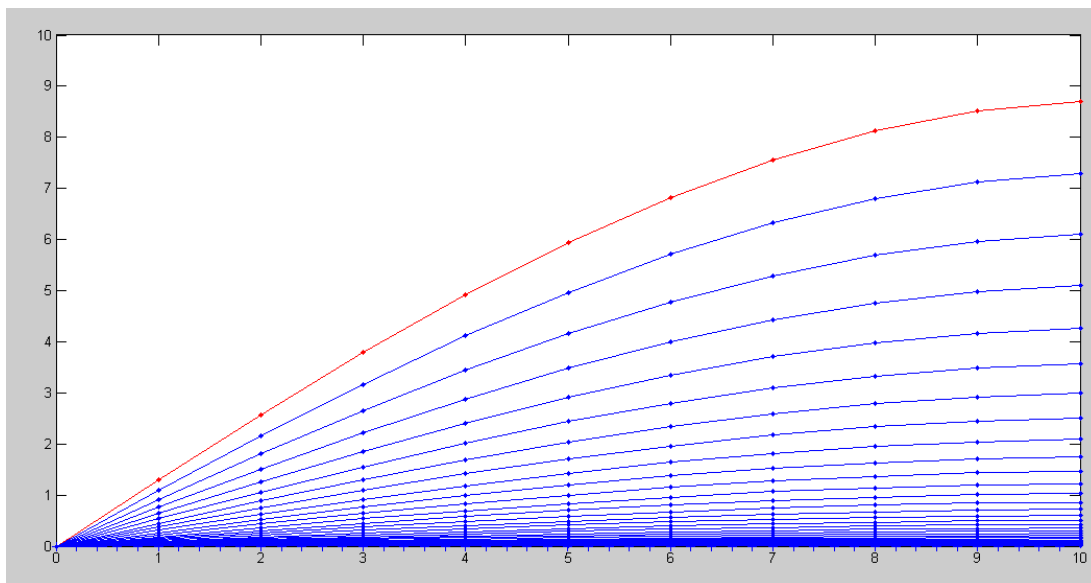
```
>>
```

Fast Mode:



Fast Mode: The shape remains the same (the eigenvector).
The amplitude quickly decays to zero (the eigenvalue)

Slow Mode

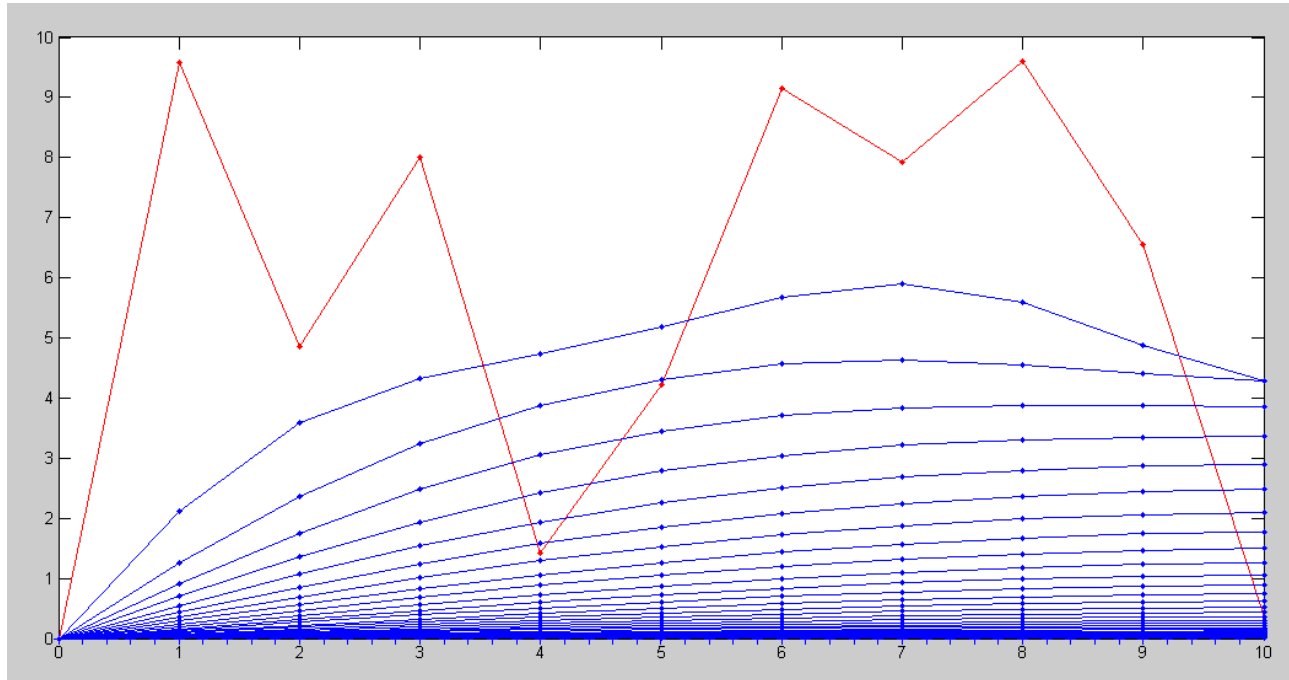


Slow Mode: The shape remains the same (the eigenvector).
The amplitude slowly decays to zero (the eigenvalue)

9) Assume $V_{in} = 0V$. Pick random voltages for $V_1 .. V_{10}$ in the range of (0V, 10V):

$$V = 10 * \text{rand}(10,1)$$

Plot the voltages at $t = 2$. Which eigenvector does it look like?



Response to a random initial condition
The fast modes decay quickly, leaving the slow mode

Matlab Code

```
% Fast Mode
V = 20*M(:,1);

% Slow Mode
V = 20*M(:,10);

% Random Initial Condition
V = 10*rand(10,1);

dV = zeros(10,1);
V0 = 0;
dt = 0.002;
t = 0;
i = 0;

while(t < 9.9)
    < rest of code >
```