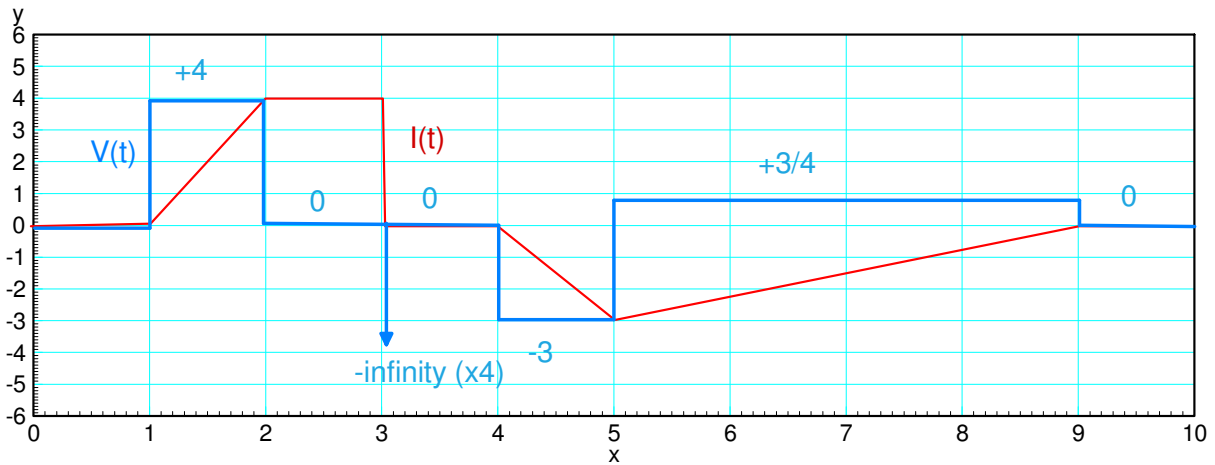
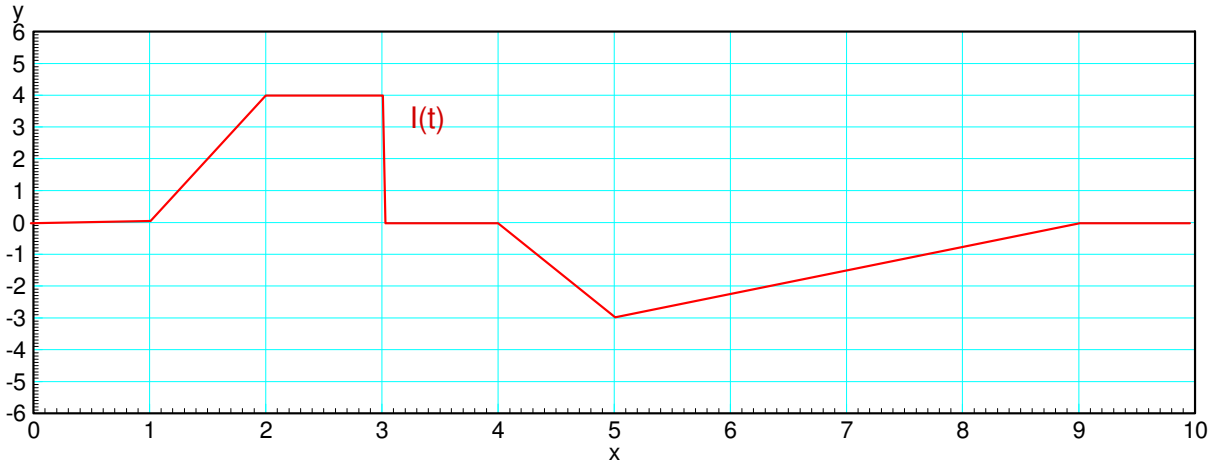


ECE 111 - Homework #8

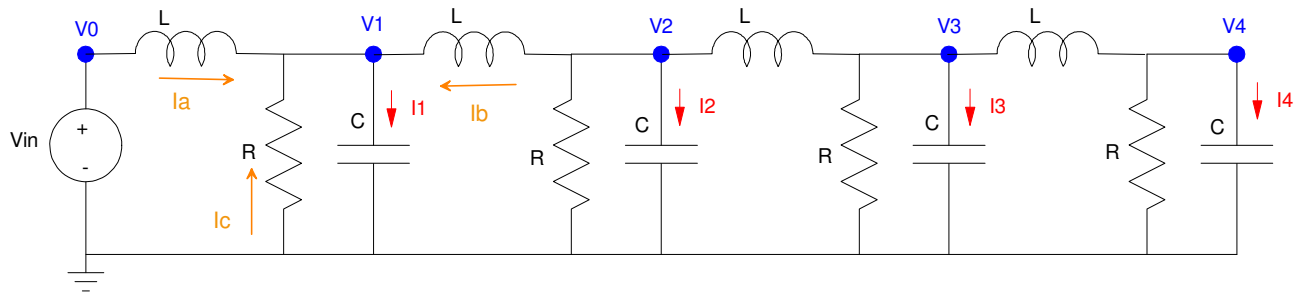
Week #8: ECE 351 Electromagnetics - - Due 11am Tuesday, October 18th

1) Assume the current flowing through a one Henry inductor is shown below. Sketch the voltage.

$$V = L \frac{dI}{dt}$$



Problem 2-3) 4-Node RLC Circuit



$R = 1000\Omega$, $C = 0.1F$, $L = 0.3H$. Repeat for 30 nodes for problems 4-6

2) Write the dynamic equations for the following 4-stage RLC circuit. (i.e. write the node equations)

$$(V_0 - V_1) = L \dot{I}_a$$

$$(V_2 - V_1) = L \dot{I}_b$$

$$I_1 = C \dot{V}_1 = I_a + I_b + I_c$$

$$C \ddot{V}_1 = \dot{I}_a + \dot{I}_b + \dot{I}_c$$

$$C \ddot{V}_1 = \left(\frac{V_0 - V_1}{L} \right) + \left(\frac{V_2 - V_1}{L} \right) + \left(\frac{0 - \dot{V}_1}{R} \right)$$

Simplifying and repeating for all four nodes (note #4 misses one term since there is no node 5)

$$\ddot{V}_1 = \left(\frac{1}{LC} \right) V_0 - \left(\frac{2}{LC} \right) V_1 + \left(\frac{1}{LC} \right) V_2 - \left(\frac{1}{RC} \right) \dot{V}_1$$

$$\ddot{V}_2 = \left(\frac{1}{LC} \right) V_1 - \left(\frac{2}{LC} \right) V_2 + \left(\frac{1}{LC} \right) V_3 - \left(\frac{1}{RC} \right) \dot{V}_2$$

$$\ddot{V}_3 = \left(\frac{1}{LC} \right) V_2 - \left(\frac{2}{LC} \right) V_3 + \left(\frac{1}{LC} \right) V_4 - \left(\frac{1}{RC} \right) \dot{V}_3$$

$$\ddot{V}_4 = \left(\frac{1}{LC} \right) V_3 - \left(\frac{1}{LC} \right) V_4 - \left(\frac{1}{RC} \right) \dot{V}_4$$

Plugging in numbers

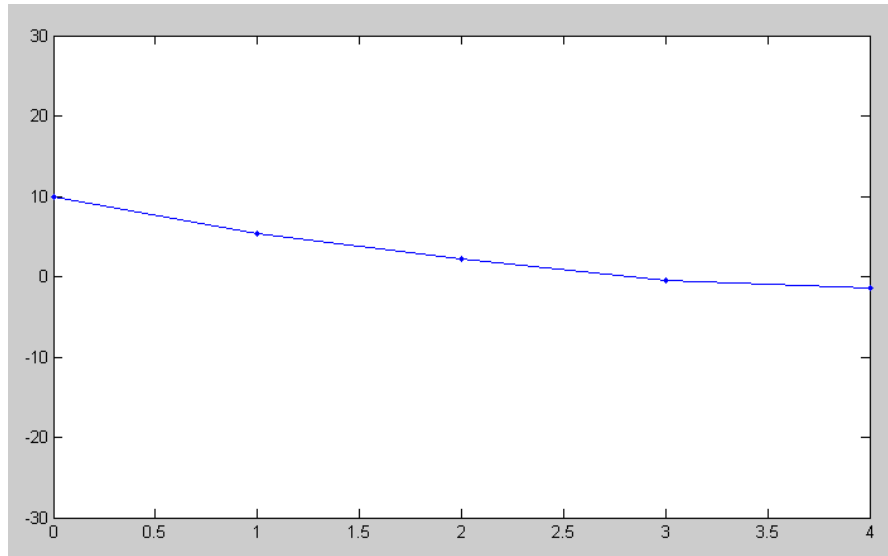
$$\ddot{V}_1 = 33.33V_0 - 66.67V_1 + 33.33V_2 - 0.01\dot{V}_1$$

$$\ddot{V}_2 = 33.33V_1 - 66.67V_2 + 33.33V_3 - 0.01\dot{V}_2$$

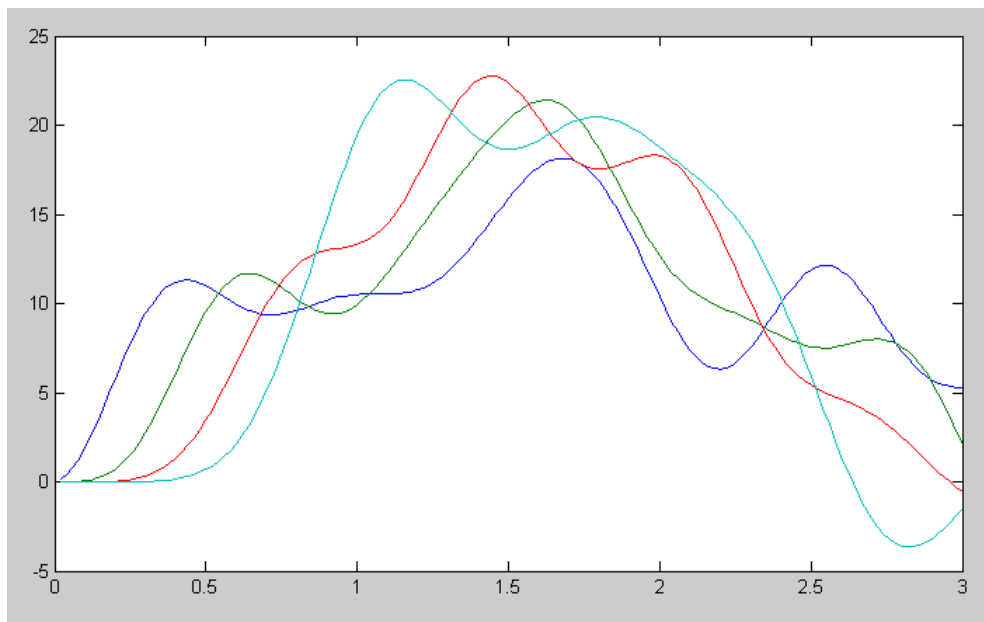
$$\ddot{V}_3 = 33.33V_2 - 66.67V_3 + 33.33V_4 - 0.01\dot{V}_3$$

$$\ddot{V}_4 = 33.33V_3 - 33.33V_4 - 0.01\dot{V}_4$$

3) Assume $V_{in} = 10V$ and the initial conditions are zero ($V_1 = V_2 = V_3 = V_4 = 0$). Solve for the voltages at $t = 3$ seconds. *Hint: Solve numerically using Matlab*



Node voltages at $t = 3.00$ seconds



Voltages vs. Time

Code:

```
% ECE 111 Lecture #8
% 4-Stage RLC Filter

V0 = 10;
V1 = 0;
V2 = 0;
V3 = 0;
V4 = 0;

dV1 = 0;
dV2 = 0;
dV3 = 0;
dV4 = 0;

V = [];

t = 0;
dt = 0.02;

while(t < 2.99)

    ddV1 = 33.33*V0 - 66.67*V1 + 33.33*V2 - 0.01*dV1;
    ddV2 = 33.33*V1 - 66.67*V2 + 33.33*V3 - 0.01*dV2;
    ddV3 = 33.33*V2 - 66.67*V3 + 33.33*V4 - 0.01*dV3;
    ddV4 = 33.33*V3 - 33.33*V4 - 0.01*dV4;

    dV1 = dV1 + ddV1*dt;
    dV2 = dV2 + ddV2*dt;
    dV3 = dV3 + ddV3*dt;
    dV4 = dV4 + ddV4*dt;

    V1 = V1 + dV1*dt;
    V2 = V2 + dV2*dt;
    V3 = V3 + dV3*dt;
    V4 = V4 + dV4*dt;

    t = t + dt;

    plot([0,1,2,3,4],[V0,V1,V2,V3,V4],'.-');
    ylim([-30,30]);
    clc
    disp(t)
    pause(0.01);

    V = [V; V1, V2, V3, V4];

end

t = [1:length(V)]' * dt;
plot(t,V);
```

Problem 4-6) 30-Node RLC Circuit (hint: modify the program Wave.m)

4) Expand the RLC circuit from problem #2 to 30 nodes. Plot the voltage at $t = 8$ seconds (just after the reflection) for $1 / R_{30}C = 0.01$

This is where matrices and for-loops are useful.

- You could take the previous code and repeat each section 30 times, or
- Place in a for-loop that counts to 30

The latter is more efficient. The trick is

- The first node is a little different: V_0 is a valid Matlab variable but $V(0)$ is not (indices start at 1)
- The last node has a slightly different formula.

Nodes 2..29 can be placed in a for-loop however

```
% ECE 111 Lecture #8
% 30-Stage RLC Filter

N = 30;    % number of nodes

V = zeros(N,1);
dV = zeros(N,1);

t = 0;
dt = 0.02;

while(t < 8)

    if (t < 2) V0 = 10 * ( ( sin(0.5*pi*t) )^2 );
        else V0 = 0;
        end

    ddV(1) = 33.33*V0 - 66.67*V(1) + 33.33*V(2) - 0.01*dV(1);

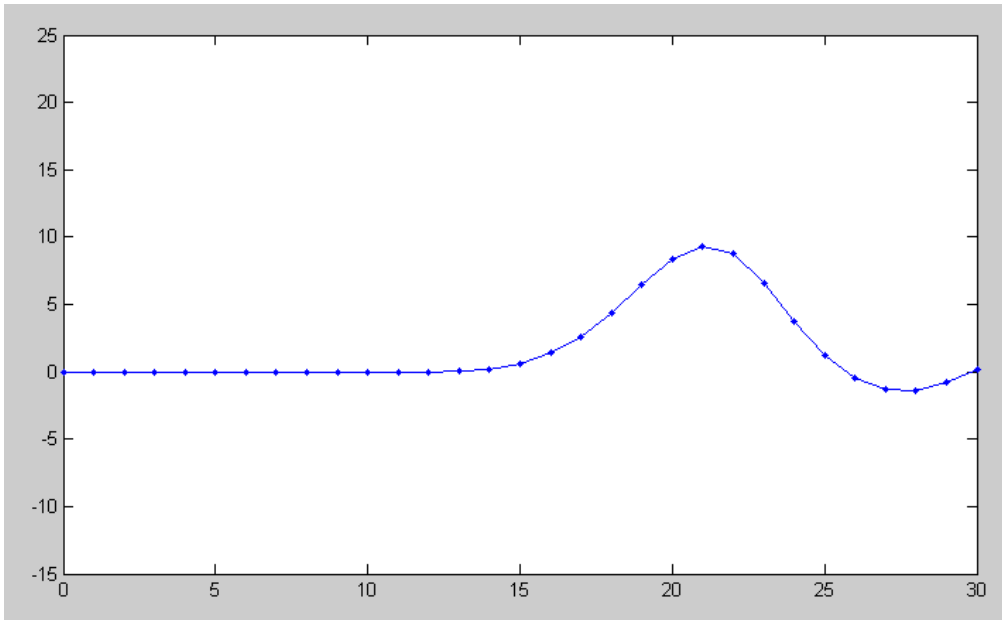
    for i=2:N-1
        ddV(i) = 33.33*V(i-1) - 66.67*V(i) + 33.33*V(i+1) - 0.01*dV(i);
    end

    ddV(N) = 33.33*V(N-1) - 33.33*V(N) - 0.01*dV(N);
%                                     ^^^
%                                     change this term

    for i=1:N
        dV(i) = dV(i) + ddV(i)*dt;
        V(i) = V(i) + dV(i)*dt;
    end
    t = t + dt;

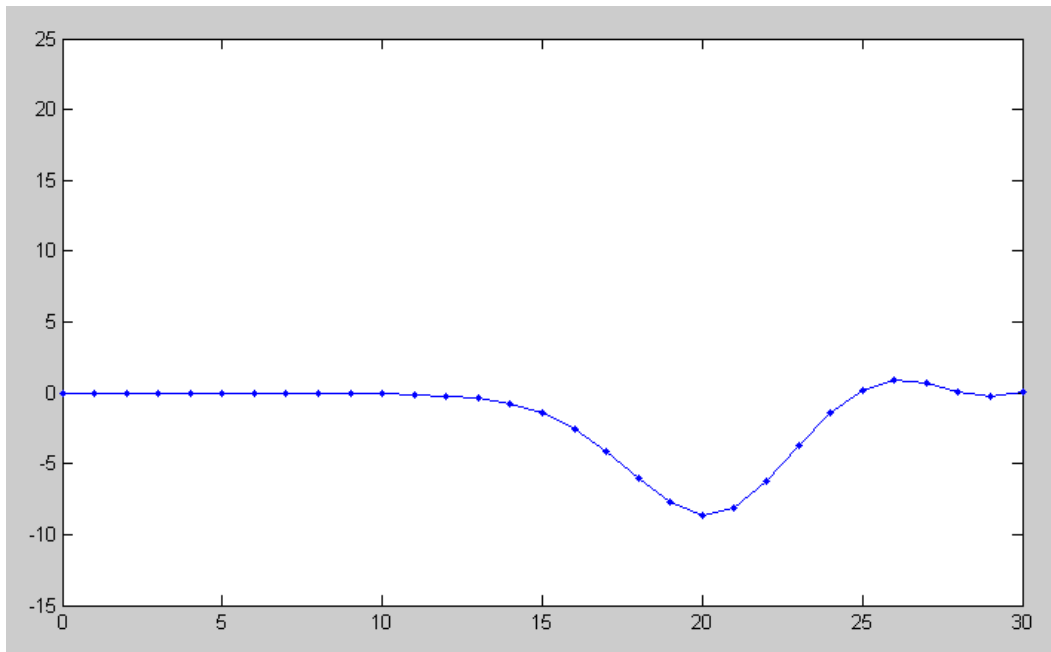
    plot([0:N],[V0;V],'.-');
    ylim([-15,25]);
    clc
    disp(t)
    pause(0.01);

end
```



Positive reflection with $R_{30} = 1000$ Ohms

5) Plot the voltage at $t = 8$ seconds for $1 / R_{30}C = 100$



Negative reflection when $R_{30} = 0.1$ Ohm

6) Determine experimentally R_{30} so that the reflection is almost zero

By trial-and-error

$$1/R_{30} * C = 5$$

$$R_{30} = 2 \text{ Ohms}$$

